

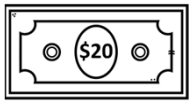


Bill and Coin Totals



- 1 If you have 6 one-dollar bills and 5 nickels, what is the total value of your currency?
- 2 What is the combined worth of 2 half-dollar coins, 1 ten-dollar bill, and 5 pennies?
- 3 How much is a combination of 2 ten-dollar bills, 3 quarters, 2 dimes, and 4 nickels worth?
- 4 What is the total worth of 2 twenty-dollar bills, 4 quarters, and 5 dimes?
- 5 If you have 3 dimes and 2 twenty-dollar bills, what is the combined value in dollars?
- 6 What is the total value of 6 nickels, 4 dimes, and 1 ten-dollar bill?
- 7 How many quarters and nickels would you need to have a total value of \$1.50?
- 8 If you have 2 ten-dollar bills, 5 quarters, and 7 dimes, what is the total value in dollars?